

Section: 1 of 11 The Plug - Ap...

Question: 3 of 58

Which figure will replace the question mark?

?	

Choose the correct option

-
-
-
-

Next Test


Activate Windows

Finish Test

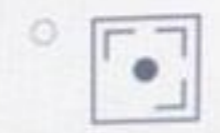
Section: 1 of 1: The Plug - Ap...

Question: 4 of 50

Which figure is missing in the given series?



Choose the correct option



None of the figures

Next

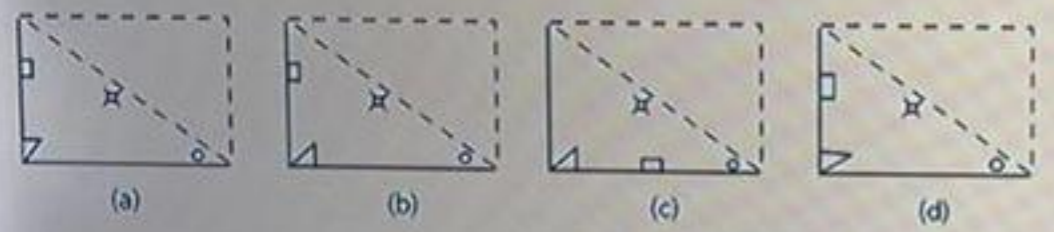
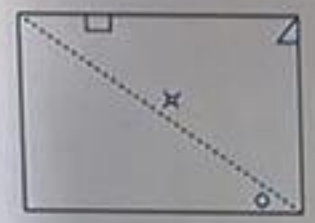
Finish Test

Question: 2 of 50

Choose the correct option


Given below is a square transparent sheet with a pattern. From the following options, find out how the pattern would appear when the transparent sheet is folded at the dotted line.

- (a)
- (b)
- (c)
- (d)



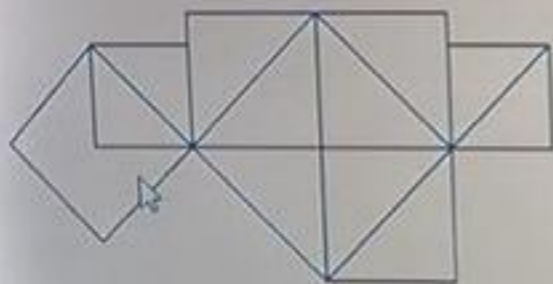
[Clear](#) [Next](#)

Question: 1 of 50



Choose the correct option

Find the number of squares in the given figure below:




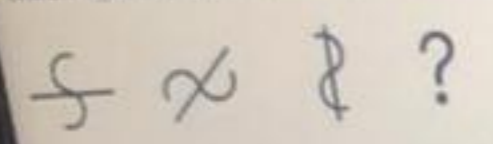
- 6
- 7
- 9
- 11

[Clear](#)



[Next](#)

Question: 8 of 10

Which figure will continue the given series?



Choose the correct option



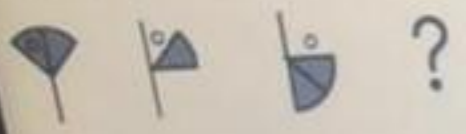
Either of the figures

Back

Next

Finish Test

Which figure will continue the given series?



Choose the correct option



None of the figures


Clear [Next](#)

[Finish Test](#)

Which figure will continue the given series?

K Y Y ?

Choose the correct option



None of the figures

Next Question

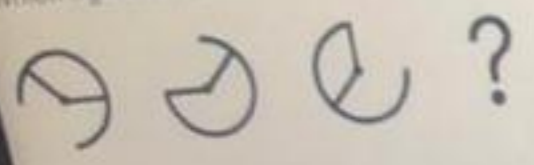
Next

Finish Test


Section 1 of 1 | The Plug - Ap...

Question: 9 of 50

Which figure will continue the given series?



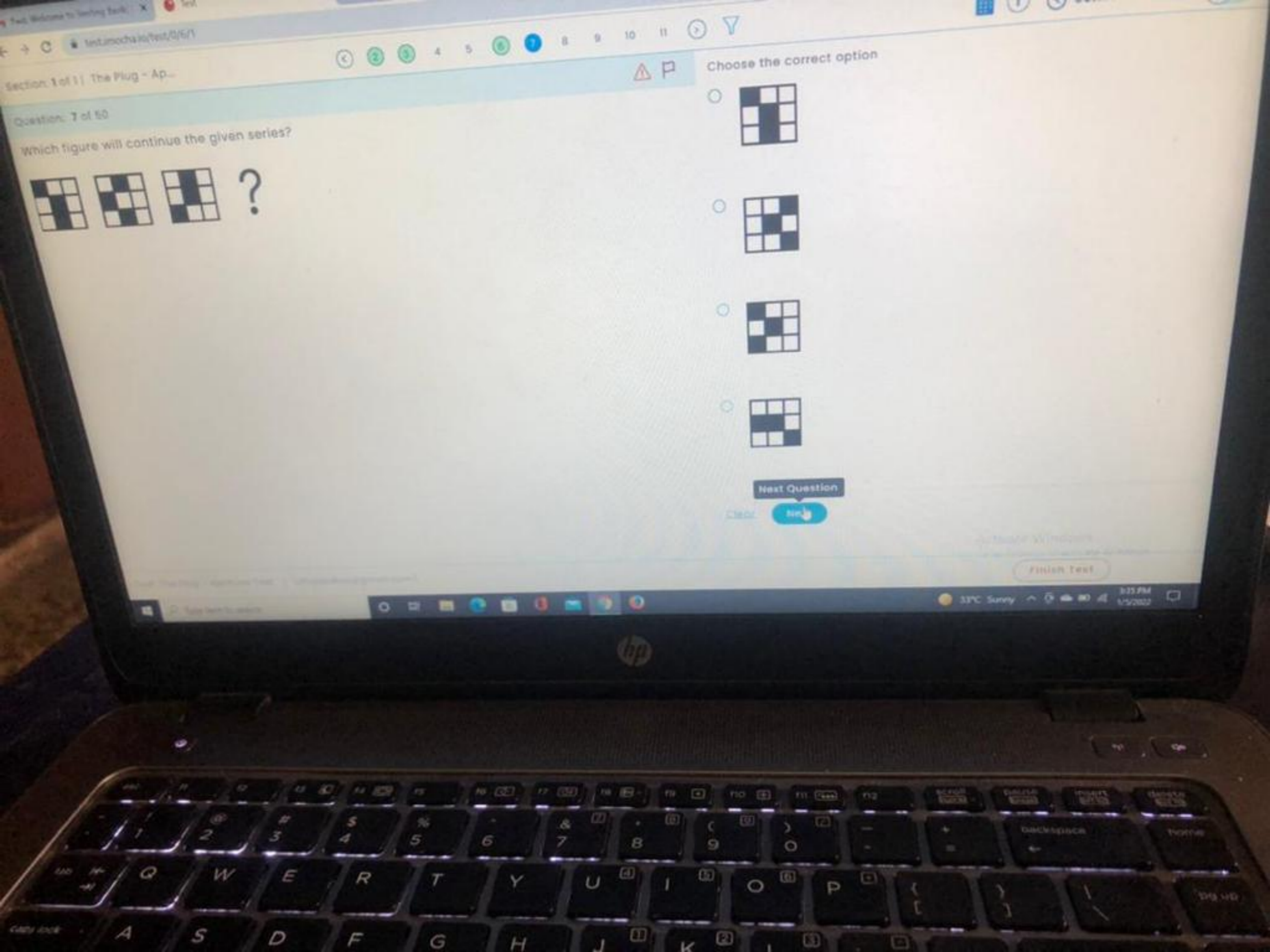
Choose the correct option



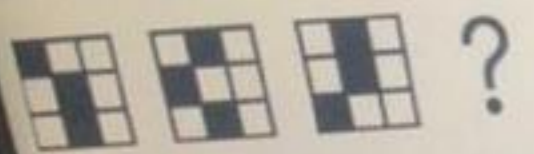
None of the figures

Previous Next


Finish Test



Which figure will continue the given series?



Choose the correct option



Next Question


Next

Finish Test

Section: 1 of 1 | The Plug - Ap...

Question: 6 of 50

The images I, II, III and IV are in a specific order. Which of the given answer options will continue the series?



Choose the correct option

-
-
-

Next

Finish Test

Section 1 of 1: The Plug - 4p...

Question: 12 of 50

\$8000 becomes \$9261 in a certain interval of time at the rate of 5% per annum of compound interest. Find the time.



Choose the correct option

- 48 months
- 72 months
- 24 months
- 36 months

Clear

Next



Section: 1 of 1 | The Plug - Ap...

Question: 11 of 50

If the rate of interest is 4% per annum for the first year, 5% per annum for the second year, and 6% per annum for the third year then the compound interest of \$10000 for 3 years will be?

Choose the correct option

- \$ 1575.5
- \$ 1600
- \$ 1625.5
- \$ 2000

Clear Next

Finish Test

A pound of rice has a mixture of two types of rice, each costing \$10 and \$30. If the average cost per pound of the mixture is \$24, what is the ratio of the different types of rice?

Choose the correct option

- 2:3
- 3:1
- 1:3
- 3:2

[Clear](#) [Next](#)

Question: 16 of 50

A group of boys is standing in a circle which represents the face of a clock. They are facing the center. A and B represent the minute and hour hand at 12 and 3 respectively. A runs to cross B and positions himself at an angle of 54 degrees from B's initial position. What is the difference between the initial and current angle between them?

Choose the correct option

- 48 degrees
- 42 degrees
- 54 degrees
- 36 degrees

Clear Next

Finish Test

Question: 20 of 50

Five people ordered a meal at a restaurant. Four of them spent \$12 less than the average amount of money they spent together and the fifth person spent \$8 less than twice the average. What was the bill for each person?

Choose the correct option

- \$56, \$56, \$56, \$56, \$58
- \$48, \$48, \$48, \$48, \$88
- \$52, \$52, \$52, \$52, \$72
- \$44, \$44, \$44, \$44, \$104

Clear


Next

FINISH TEST

Section 1 of 1 | The Plug - Ap...

Question: 16 of 50

The average age of 8 teachers of a school is 38 years. When one teacher, aged 47, resigns, and another joins in, the average age of the staff members reduces by 1.5. What is the present age of the newly appointed teacher?



Choose the correct option

- 34
- 35
- 36
- 37

Clear

Next

Finish Test

Section: 1 of 11 The Plug - Ap...

Question: 21 of 50

A sentence is given below with double blanks. Fill in the blanks with appropriate words from the given options.


In the comic book, the superhero's kinetic power _____ him to move faster _____ the speed of light.

Choose the correct option

- Allows, than
- Allowed, than
- Allows, then
- Allowing, than

Clear Next

Finish Test



Choose the correct option

Question: 17 of 50

The sum of the present ages of A and B is 40 years. After 4 years, the age of A will be 3 times that of B. What is the present age of B?

- 12
- 16
- 8
- 10

Clear

Next

Finish Test

Question: 19 of 50

There are 80 passengers on a bus. The average mass of the passengers is 165 lbs. If every passenger is also carrying a 22 lbs bag, what is the percentage increase in the mass?

Choose the correct option

- 10%
- 11%
- 12%
- 13%

Clear

Next

Finish Test

Section: 1 of 1 | The Plug - Ap...

Question: 22 of 50

A sentence is given below with double blanks. Fill in the blanks with appropriate words from the given options.

Timmy would beg, constantly _____ his mother for a new cell-phone, _____ she would always say, "No!"

Choose the correct option

- Entreated, henceforth
- Entreating, thus
- Entreating, but
- Entreats, then

Clear Next

Finish Test

Question: 18 of 50

12 executive members of a club donate \$50 each towards a relief fund. The head of the club donates \$12 more than the average of all the donated amount. What was the total amount donated?

Choose the correct option

- \$662
- \$663
- \$664
- \$665

Clear **Next**

Finish Test

A sentence is given below with double blanks. Fill in the blanks with appropriate words from the given options.

Footprints in the snow _____ the hunters, who mistakenly _____ they were alone in the forest.

Choose the correct option

- Puzzling, assumes
- Puzzled, assumed
- Puzzles, assuming
- Puzzle, assume

Clear

Next



Section: 1 of 1 | The Plug - Ap...

Question: 24 of 50

A sentence is given below with double blanks. Fill in the blanks with appropriate words from the given options.

Navin and her sister _____ to fly a kite, but the wind wasn't strong enough to hold it _____ the air.

Choose the correct option

- Trying, off
- Try, at
- Tried, in
- Tries, towards

Clear

Next

Finish Test



Section: 1 of 1 | The Plug - Ap...
Question: 23 of 50

A sentence is given below with double blanks. Fill in the blanks with appropriate words from the given options.

The championship team's performances were _____ with indefinable magic that could only be _____ in person.

- Choose the correct option
- Blessed, experienced
 - Bless, experience
 - Blessing, experiencing
 - Blessed, experience

Clear [Next](#)

Finish Test

Section: 1 of 1 | The Plug - Ap...

Question: 27 of 50

A sentence is given below with double blanks. Fill in the blanks with appropriate words from the given options.

The teacher will probably _____ I am not listening to her lecture _____ I have my eyes closed.

Choose the correct option

- Concludes, since
- Conclude, because
- Conclude, as
- Concluding, than

Clear **Next**

Finish Test

Question: 25 of 50

A sentence is given below with double blanks. Fill in the blanks with appropriate words from the given options.

Jay was _____ sulky at the graduation party, but he tried to _____ his apathetic attitude.

Choose the correct option

- Quiet, hide
- Quite, hide
- Quietly, hiding
- Quit, hidden

Clear

Next

Finish Test

A sentence is given below with double blanks. Fill in the blanks with appropriate words from the given options.

The ghost's spooky voice traveled _____ the hallway and _____ the haunted house visitors.

Choose the correct option

- Thorough, scares
- Though, scaring
- Thought, scare
- Through, scared

Clear

Next

Finish Test



Section: 1 of 1 | The Plug - Ap...

Question: 32 of 50

Your colleague suggests a new way of generating leads for the sales team during a strategy brainstorming meeting. How should you react to this idea of change?

Choose the correct option

- We have always done cold-calling and had success. Why change now?
- Shoot down the idea
- Consider data that shows a different method could increase sales
- None of the options

Clear Next

Finish Test



Section: 1 of 1 | The Plug - Ap...

Question: 34 of 50

At work, your manager presents you with a problem. You immediately go off and start looking for solutions. What is the best approach to reach a solution?

1. Take a step back first to analyze the situation, and then gather and review as much information as possible.
2. Ask different people involved about their opinion or how the problem affects the day-to-day proceedings of the people and the subsequent broader business.
3. Take the time to come up with several options and test each of them before making your final judgment.
4. Use the solutions for previously solved problems.

Choose the correct option

- 1
- 1 and 2
- 1, 2, 3, and 4
- 1, 2, and 3

Clear

Next

Finish Test

Section: 1 of 1: The Plug - Ap...

Question: 31 of 50

You are looking into CSR for your company. You need to allot funds such that they are utilized to their maximum, and the company stays in the positive limelight. What can be the right way to pick your causes?

Choose the correct option

- On the basis of moral standards
- On the basis of emotional response
- On the basis of ethics
- On clearly examining all aspects and being aware of the of one's emotions

Clear Next

Finish Test

Section: 1 of 1 | The Plug - Ap...

Question: 33 of 50

You own a company that makes customized stationery. You promote your products as an excellent gifting idea, and your holiday orders break your previous sales record. The problem is that you do not have enough material to fulfill your orders. What should you consider first?

Choose the correct option

- Study what material is not present and how its unavailability affects your products
- Infer the reason for unavailability of the material
- Calling suppliers for buying all the material
- Any of the options

Clear Next

Finish Test

Section 1 of 1 | The Plug - Ap...

Question: 10 of 50

A sentence is given below with double blanks. Fill in the blanks with appropriate words from the given options.

The strong-faced man _____ the same jowls as his grandfather and embraced his jawline as a _____ family trait.

Choose the correct option

- Has, coveting
- Had, covet
- Had, coveted
- Have, coveting

Clear [Next](#)

Finish Test



Section 1 of 1: The Plug - Ap...

Question: 29 of 50

A sentence is given below with double blanks. Fill in the blanks with appropriate words from the given options.

The word that _____ one hundred employees would be laid off left the supervisor shook and _____

Choose the correct option

- Across, unsettling
- Along, unsettle
- Over, unsettled
- Considering, unsettling

Clear Next

Finish Test

You are an accountant at ABC Corp. Many of your more mundane tasks have been taken over by technology. Accounting platforms can produce profit-and-loss statements, prepare accounts, issue invoices, and create balance sheets. This pitches technology as a threat to jobs in accounting. How can you convert this threat into an opportunity?

- Choose the correct option
- Focus your efforts on adding real value to your clients by interpreting the data with this technology.
 - Don't take the recommendations put forward by the technology for improvement.
 - Don't use the technology for forecasting.
 - Respond to risks by manual predictions.

Back Next

Section 1 of 1: The Plug - Appl...

Question: 38 of 55

As the team leader in your department, you have to come up with a strategy to improve upon a specific product. How can you achieve this?

Choose the correct option

- You only allow some specific members of the team to list all the concerns
- Recommend a solution as final and vote on it but do not accept suggestions
- Create a solution based on all the information given by your entire team
- Ask the team members to discuss their strategy privately with you

Back Next

Finish Test

Question 38 of 100

You are allocating a lot of time to activities like administrative tasks or internal reporting that have a low return. How can you solve this issue?

- Choose the correct option
- Continue the trend, as it is an important part of your job.
 - Do a time study.
 - Ask your boss for solutions and reducing the workload.
 - Re-prioritize your schedule to spend more time on high-return tasks.

Clear Next

Section 1 of 12: The Plug - 4p...

Question: 38 of 50

You work at a digital gifting service and your client is refusing to accept the order after its completion. What should be your first response in such a situation?

- Choose the correct option
- You begin with the observed effect or symptom and ask why it occurred
 - The goal is to determine all possible causes of a problem
 - There are 5 questions to ask, each of which begins with "why"
 - None of the options

Clear Next

FINISH TEST

Test: Software Testing Fundamentals

Section: 1 of 1: The Plug - AD-

Question: 37 of 50

As a project manager at a software company, you are managing the launch of a new product. The prototype of a new software needs to be ready in a week, but the quality check team does not want to sign off on the documentation until you do more testing. You are under pressure from the directors to make sure that everything is ready for the launch. What are your possible options?

Choose the correct option

- A) You could call a meeting to have everyone sign the documents at once after the testing has been done.
- B) You talk to the quality team and figure out exactly what kind of testing they need.
- C) Skip testing as there is little time left.
- Both A and B

Clear Next

32°C Sunny 3:08 PM 1/5/2022

Test Welcome to Testing Suite

Section 1 of 1 | The Plug - Ap...

Question: 40 of 50

Various corporate offices are in two to twenty storey structures. If a building contains four floors, it has an elevator. If these assertions are true, choose the option which is true.

Choose the correct option

- The second floor does not have lifts.
- Seventeen floors have lifts
- Only floors above the third level have lifts
- All floors may be reached by lifts

Cancel [Next](#)

Finish Test

32°C Sunny 3:18 PM 1/5/2023

The following table gives a comparative analysis of different articles being sold in three different shops on different discount percentages. There are three shops A, B, and C which sell different articles: equipment, clothes, shoes, and accessories.

Discounts in Sports Shops

Article	Shop A	Shop B	Shop C
Sports equipment	13%	12%	11%
Clothes	10%	-	12%
Shoes	22%	24%	20%
Accessories	-	5%	6%

You have spent \$100 on accessories at shop B. Find out how much you would have spent without the discount percentage.

Choose the correct option

- \$126.30
- \$125.00
- \$120.60
- \$115.20

Clear

Next



Question: 15 of 50

A group of boys is standing in a circle which represents the face of a clock. They are facing the center. A and B represent the minute and hour hand at 12 and 3 respectively. A runs to cross B and positions himself at an angle of 54 degrees from B's initial position. What is the difference between the initial and current angle between them?

Choose the correct option

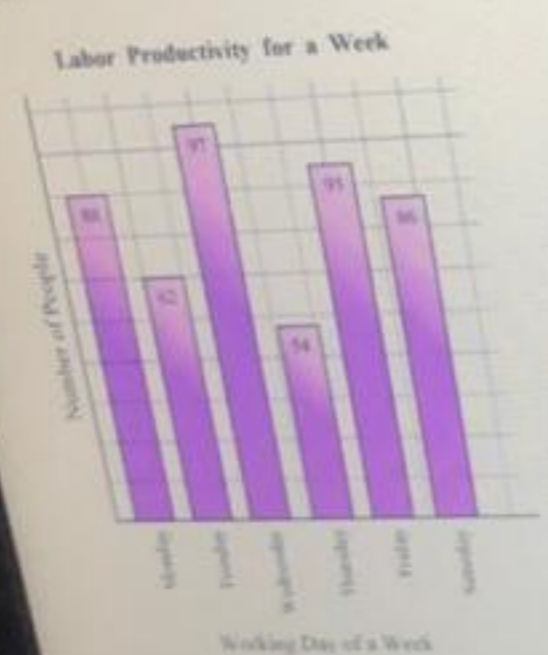
- 48 degrees
- 42 degrees
- 54 degrees
- 36 degrees

[Clear](#)[Next](#)

Section: 1 of 1 | The Plug - Ap...

Question: 42 of 50

A survey about which day of a week do people consider to be the most productive was conducted. The bar chart provides the number of people who took part in the survey along with their preferences.



Based on the information from the bar chart, how many more people think that the first three days

Choose the correct option

- 27
- 17
- 18
- 14

Clear Next


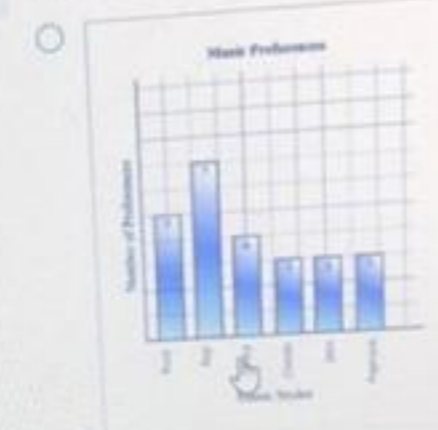
Finish Test

The following table lists the music preferences in different batches of a dance class.

Rock	Rap	Country	Rap	Classic
Jazz	Rock	Poprock	Classic	Rap
Country	Poprock	Jazz	Rap	Rap
Classic	Rock	Country	Rock	Poprock
Rap	Rap	Jazz	Rock	Poprock

Which of the following bar graphs represents the same preferences as the given table?

Choose the correct option



Next

Finish Test

Question: 43 of 50

The following table shows the market statistics (per annum) of different natural resources.

Products	No. of Employees (thousands)	Value of Extracted Products (millions)	Market Value (millions)	
			Asia	U.S.A
Oil	1,572	\$7,568	\$487	\$1,574
Copper	1,225	\$1,587	\$821	\$928
Coal	957	\$2,456	\$725	\$1,375
Uranium	1,542	\$6,375	\$427	\$1,208
Silver	1,022	\$1,500	\$700	\$1,799

Choose the correct option

- \$5.3
- \$5.5
- \$5.7
- \$5.9

Clear Next

On average, how much market value (per week) would an employee create if he were working in Asia for uranium?

Finish Test